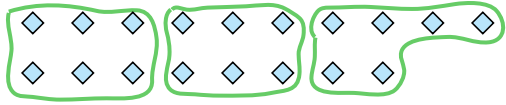


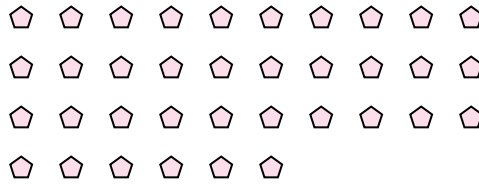
Use the shapes provided to answer the questions.

Answers


Ex) How many groups of 6 can you make with the 18 shapes below?



1) How many groups of 9 can you make with the 36 shapes below?

Ex. 3

2) How many groups of 4 can you make with the 32 shapes below?




3) How many groups of 5 can you make with the 30 shapes below?



4) How many groups of 5 can you make with the 10 shapes below?



5) How many groups of 2 can you make with the 32 shapes below?



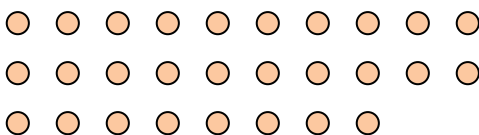
6) How many groups of 5 can you make with the 30 shapes below?



7) How many groups of 4 can you make with the 40 shapes below?




8) How many groups of 7 can you make with the 28 shapes below?




9) How many groups of 3 can you make with the 9 shapes below?



10) How many groups of 5 can you make with the 40 shapes below?



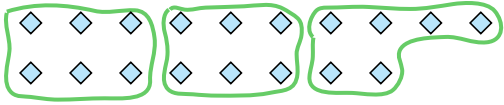
11) How many groups of 6 can you make with the 30 shapes below?






Use the shapes provided to answer the questions.

- Ex) How many groups of 6 can you make with the 18 shapes below?



- 2) How many groups of 4 can you make with the 32 shapes below?



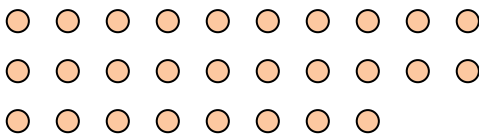
- 4) How many groups of 5 can you make with the 10 shapes below?




- 6) How many groups of 5 can you make with the 30 shapes below?



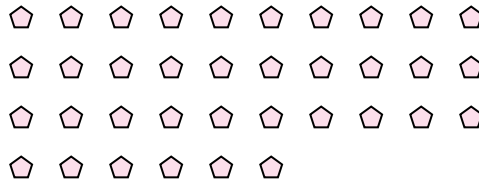
- 8) How many groups of 7 can you make with the 28 shapes below?



- 10) How many groups of 5 can you make with the 40 shapes below?




- 1) How many groups of 9 can you make with the 36 shapes below?



- 3) How many groups of 5 can you make with the 30 shapes below?



- 5) How many groups of 2 can you make with the 32 shapes below?




- 7) How many groups of 4 can you make with the 40 shapes below?



- 9) How many groups of 3 can you make with the 9 shapes below?



- 11) How many groups of 6 can you make with the 30 shapes below?

**Answers**Ex. 31. 42. 83. 64. 25. 166. 67. 108. 49. 310. 811. 5